

Monday 20 June 2022 – Morning

A Level Chemistry B (Salters)

H433/02 Scientific literacy in chemistry


Time allowed: 2 hours 15 minutes

You must have:

- a clean copy of the Advance Notice Article (inside this document)
- the Data Sheet for Chemistry B

You can use:

- a scientific or graphical calculator
- an HB pencil



Please write clearly in black ink. **Do not write in the barcodes.**

Centre number

--	--	--	--	--

Candidate number

--	--	--	--

First name(s)

Last name

INSTRUCTIONS

- Use black ink. You can use an HB pencil, but only for graphs and diagrams.
- Write your answer to each question in the space provided. If you need extra space use the lined pages at the end of this booklet. The question numbers must be clearly shown.
- Answer **all** the questions.
- Where appropriate, your answer should be supported with working. Marks might be given for using a correct method, even if your answer is wrong.

INFORMATION

- The total mark for this paper is **100**.
- The marks for each question are shown in brackets [].
- Quality of extended response will be assessed in questions marked with an asterisk (*).
- This document has **20** pages.

ADVICE

- Read each question carefully before you start your answer.

Answer **all** the questions.

- 1 Portland cement is a powder that 'sets' to a strong solid when water is added. The cement is usually mixed with gravel so that it sets to make concrete.

The typical ingredients of Portland cement are shown in the table.

Ingredients (solids)	% by mass
CaO	61 – 67
SiO ₂	19 – 23
Al ₂ O ₃	2.5 – 6
Fe ₂ O ₃	0 – 6
SO ₃	1.5 – 4.5

- (a) Give the systematic name for Fe₂O₃.

..... [1]

- (b) (i) A hazard warning for Portland cement states that it is alkaline.

One of the ingredients in the table reacts with water to form an alkaline solution.

Write an equation for the reaction of this ingredient with water including any ions that are formed.

[2]

- (ii) When Portland cement sets, the calcium oxide absorbs carbon dioxide from the air.

Suggest an equation for the reaction that occurs.

[1]

- (c) One way of testing for the presence of calcium in the cement would be a flame test, though any iron present would interfere.

- (i) What is the flame colour of calcium?

..... [1]

- (ii) The flame colour is caused by bright lines in the atomic emission spectrum of calcium.

Explain how these lines are formed.

.....

.....

.....

..... [2]

- (iii) Calculate the frequency of a line of wavelength 6.16×10^{-7} m.

frequency = Hz [2]

- (d) Fe_2O_3 and CaO are present in Portland cement.

- (i) In which 'blocks' of the periodic table are these elements found?

Ca

Fe [1]

- (ii) The electron configuration of a calcium **ion** is $1s^2 2s^2 2p^6 3s^2 3p^6$.

How does the electron configuration of the **cation** in Fe_2O_3 differ from this?

.....

..... [1]

- (iii) Explain why iron can form two stable cations.

.....

..... [1]

- (e) Fe_2O_3 is soluble in concentrated hydrochloric acid.

Excess sodium hydroxide is added to this solution.

Name the precipitate formed and describe its colour.

name:

colour: [1]

- (f) (i) A student has a solution containing $\text{Fe}^{3+}(\text{aq})$ and reads that it will react with iodide ions to form iodine. The iodine can then be titrated with sodium thiosulfate.

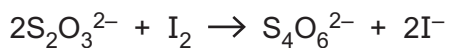
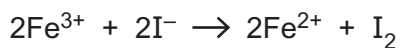
Describe a method to measure the volume of sodium thiosulfate solution required to react with the iodine from 25 cm^3 of $\text{Fe}^{3+}(\text{aq})$.

.....
.....
.....
.....
.....
.....
.....
.....
.....
.....
.....

[5]

- (ii) The student finds that 25.0 cm^3 of $\text{Fe}^{3+}(\text{aq})$ requires 3.2 cm^3 of 0.510 mol dm^{-3} sodium thiosulfate.

Calculate the concentration of the $\text{Fe}^{3+}(\text{aq})$.



Give your answer to an **appropriate** number of significant figures.

$[\text{Fe}^{3+}] = \dots\dots\dots\text{ mol dm}^{-3}$ [3]

(iii) The student decides to repeat the experiment using $0.0510 \text{ mol dm}^{-3}$ sodium thiosulfate.

Suggest why the student does this.

.....

.....

.....

..... [2]

(g) Iron is formed in stars by fusion reactions.

Complete the nuclear equation for one such reaction.



(h) The table shows the stable isotopes of iron and their abundances.

Mass number	Abundance / %
54	5.85
56	91.75
57	2.12
58	0.28

(i) What is meant by the term **mass number**?

.....

..... [1]

(ii) Explain, without doing a calculation, how this data shows that the relative atomic mass of iron is below 56.

.....

.....

..... [1]

2 'Polybutene' is used in lip gloss.

The monomers for polybutene are the three isomers of butene, which are 2-methylpropene, but-2-ene and isomer **A**.

(a) Draw the **skeletal** formula of isomer **A** and name it.

skeletal formula:

name: [1]

(b) Give the number of π bonds and σ bonds in but-2-ene, $\text{CH}_3\text{CH}=\text{CHCH}_3$.

π bonds σ bonds [1]

(c) But-2-ene, $\text{CH}_3\text{CH}=\text{CHCH}_3$, exists as *E* and *Z* isomers.

(i) Draw the structure of the *E* isomer of but-2-ene.

[1]

(ii) Does 2-methylpropene, $(\text{CH}_3)_2\text{C}=\text{CH}_2$, have *E* and *Z* isomers?

Explain your answer.

.....
 [1]

(d) Draw the repeating unit of the polymer of 2-methylpropene, $(\text{CH}_3)_2\text{C}=\text{CH}_2$.

[1]

(e) The presence of the three isomers as monomers in 'polybutene' means that different side-chains are present that do not allow the polymer chains to get close together. This causes the polymer to be a liquid suitable for lip gloss.

Name the intermolecular bonds that hold the chains together in polybutene.

..... [1]

- (f) But-2-ene, $\text{CH}_3\text{CH}=\text{CHCH}_3$, reacts with hydrogen bromide.

Draw the mechanism for this reaction.

Show curly arrows, full charges and the product.

[3]

- (g) But-2-ene reacts with hydrogen to form butane.

Name a catalyst and the corresponding conditions for this reaction.

catalyst:

conditions: [1]

- (h) But-2-ene is formed industrially by cracking alkanes from crude oil.

- (i) Complete the equation for a cracking reaction.

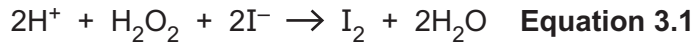


- (ii) Cracking is an example of heterogeneous catalysis.

Name the **first** step in the mechanism of heterogeneous catalysis.

..... [1]

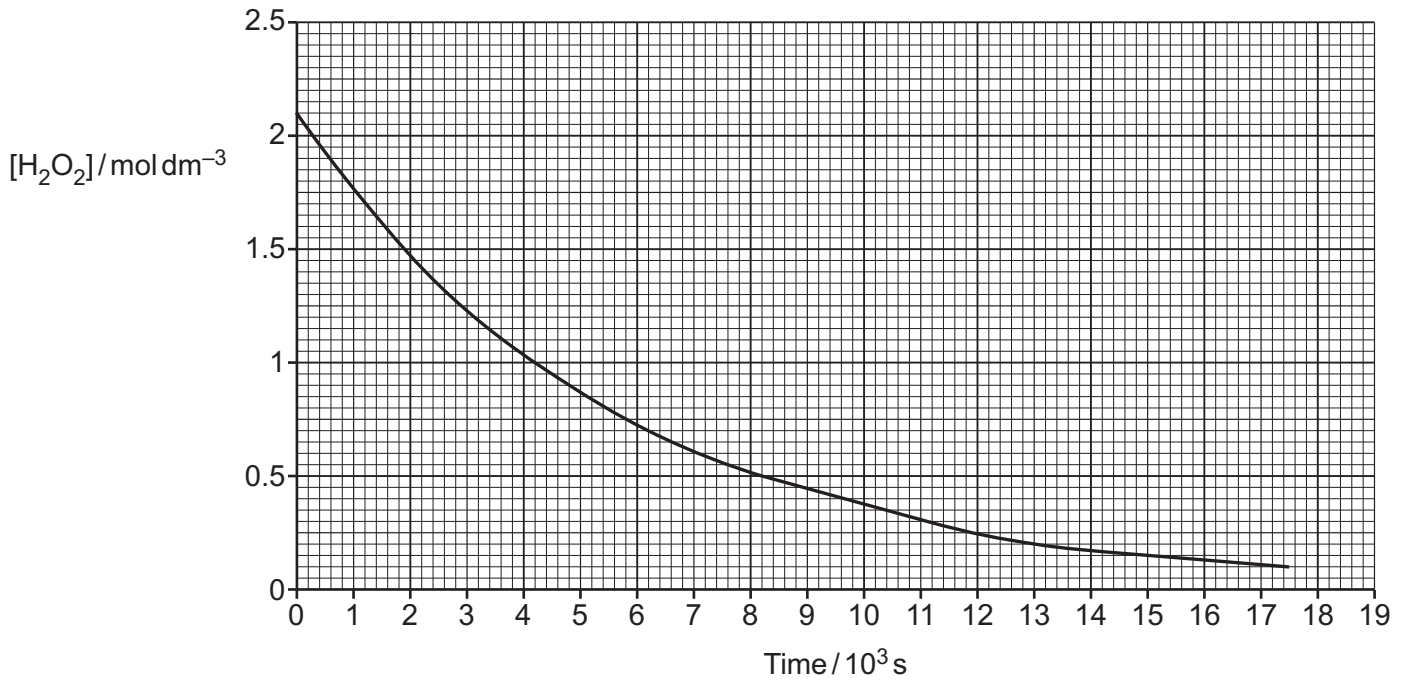
- 3 Some students read about the reaction between hydrogen peroxide and iodide ions as shown in equation 3.1.



- (a) The students find the results of an experiment which measures the concentration of hydrogen peroxide at various times.

Large excesses of acid and iodide ions are present.

The students plot a graph of these results as shown below.



- (i) Use the graph to measure two half-lives to show that the kinetics are first order.

Show your working on the graph.

first half-life =

second half-life = [3]

- (ii) Use the graph to measure the initial rate of the reaction in mol dm⁻³ s⁻¹.

initial rate = mol dm⁻³ s⁻¹ [1]

- (iii) The graph shows that the reaction in **equation 3.1** is first order with respect to hydrogen peroxide.

Explain why the orders with respect to the other reagents cannot be determined from this experiment.

.....

.....

.....

..... [2]

- (b) The students then set up some experiments to find the orders of reaction with respect to iodide and hydrogen ions.

At the starting time they mix the hydrogen peroxide, acid and iodide ions together with a fixed volume of sodium thiosulfate and starch solutions.

They measure the time for the colourless solutions suddenly to go dark blue as iodine is formed.

- (i) Suggest why the tubes go dark blue after a period of time rather than gradually from the start.

.....

.....

.....

.....

.....

..... [2]

- (ii) How can the relative rates of reaction be found from the students' results?

.....

..... [1]

.....

.....

.....

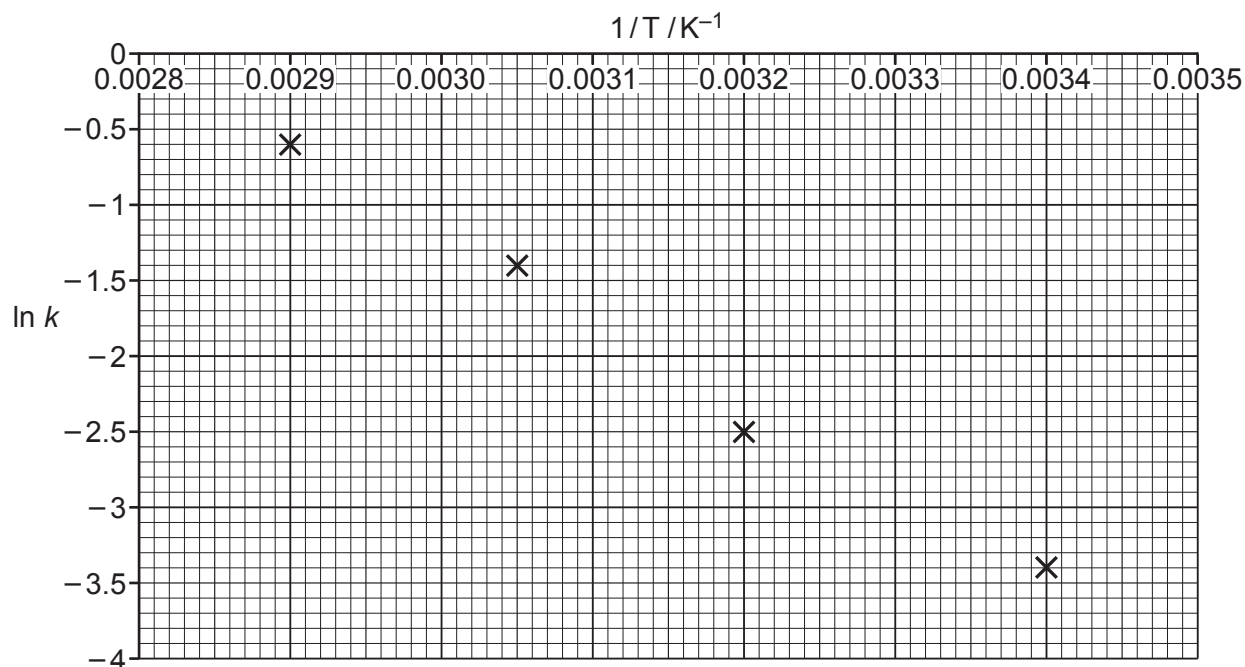
.....

.....

.....

.....

- (d) The students find data for the variation of the rate constant, k , with temperature. From their data they plot the graph below.



Use the graph to calculate E_a in kJ mol^{-1} for the reaction in **equation 3.1**.

$$E_a = \dots\dots\dots \text{kJ mol}^{-1} \text{ [4]}$$

4 Chymotrypsin is an enzyme present in the small intestine.

One of the amino acids in chymotrypsin is serine, which can be represented as HOOCCHRNH_2 .

(a) (i) A molecule of serine has a chiral centre and two enantiomers.

Draw and label **two** serine molecules below to illustrate the meaning of the terms **chiral centre** and **enantiomer**.



[3]

(ii) Glycine $\text{HOOCCH}_2\text{NH}_2$ is another amino acid.

In solution, glycine exists as a zwitterion.
Draw the structure of this zwitterion.

[1]

(b) Serine reacts with glycine to form two dipeptides.

(i) In the boxes below, draw the structural formulae for the two dipeptides.

--	--

[2]

- (ii) Explain, with a reason, whether the reaction to form the dipeptides is condensation or addition.

.....
 [1]

- (c) Chymotrypsin is a protein with a definite amino acid sequence and parts that have an α -helical structure.

- (i) What name is given to the amino acid sequence of a protein?

..... [1]

- (ii) What name is given to the α -helical structure and how is it held together?

.....

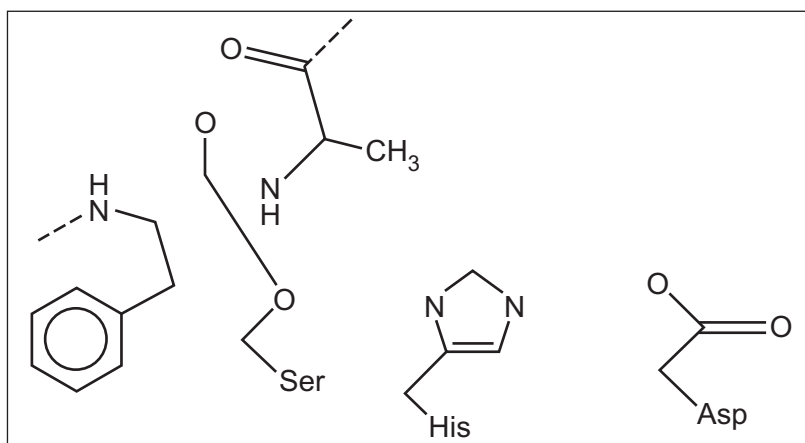
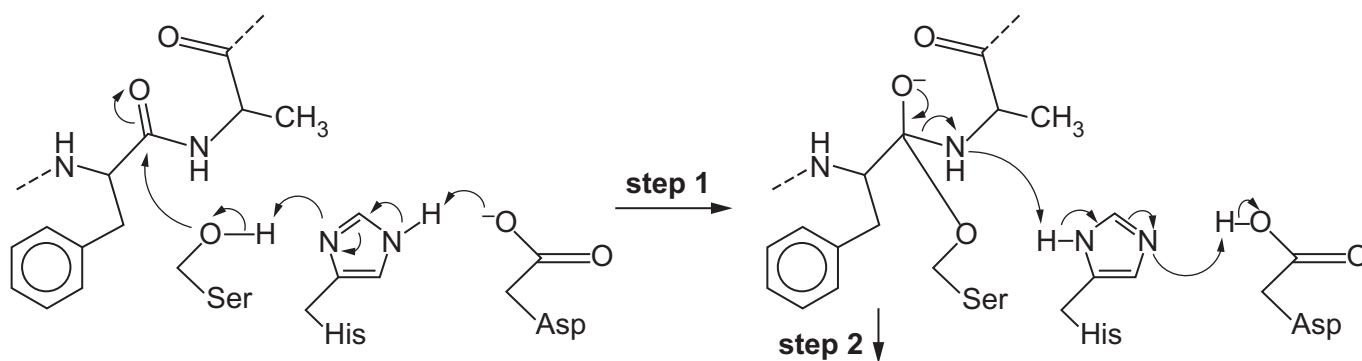
 [2]

- (d) Chymotrypsin catalyses the hydrolysis of proteins in the small intestine.

The active site of chymotrypsin consists of the amino acids serine, histidine and aspartic acid. These occur on different parts of the chain that are brought together by the folding of the structure.

The start of the hydrolysis mechanism is shown below. The protein being hydrolysed is at the top left.

Complete the diagram in the box below to show the results of the electron movements in step 2.



(e) (i) Explain why warming a solution of chymotrypsin will destroy its activity as an enzyme.

.....
.....
.....
..... [2]

(ii) Chymotrypsin has an optimum pH = 8.

Draw a sketch to suggest the shape of the graph of chymotrypsin activity against pH.

Explain the shape of your graph.

.....
..... [3]

(iii) A student says that the rate of an enzyme reaction is proportional to the substrate concentration.

Comment on the student's statement, correcting any errors.

.....
.....
.....
.....
.....
..... [2]

5 This question concerns the Advanced Notice Article 'Fluoride compounds in dental hygiene' that is included as an insert with this paper.

(a) Hydrofluoric acid (HF) is described in the article as 'moderately strong' with a pK_a of 3.14.

(i) Write the expression for K_a for HF and give its units.

$$K_a =$$

units [2]

(ii) Calculate the $\frac{[F^-]}{[HF]}$ ratio in hydrofluoric acid under the acidic conditions in plaque at pH 5.0.

$$\frac{[F^-]}{[HF]} = \dots\dots\dots [3]$$

(b) The HPO_4^{2-} ion is mentioned in the article.

Write the formula of the conjugate base of the HPO_4^{2-} ion and explain your answer.

.....

 [2]

(c) SnF_2 is said in the article to hydrolyse at 'higher pH'.

Suggest an equation for the reaction between SnF_2 and hydroxide ions.

[1]

(d) Name the shape around the N atom in the $-NH_3^+$ group in dectafur.

..... [1]

- (e) (i) Explain the relationship between the ion product, IP, and the solubility product, K_{sp} , for an ionic substance.

.....
.....
.....
.....
..... [2]

- (ii) Calculate the supersaturation of calcium fluoride in saliva after brushing.

Give your answer to the **nearest whole number**.

supersaturation = [3]

- (f) Calculate the ppm by mass of fluorine in pure fluoroapatite, $\text{Ca}_5(\text{PO}_4)_3\text{F}$.

ppm by mass = [2]

ADDITIONAL ANSWER SPACE

If additional space is required, you should use the following lined page(s). The question number(s) must be clearly shown in the margin(s).

This section of the page is a large, empty area of lined paper. It features a vertical solid line on the left side, creating a margin. The rest of the page is filled with horizontal dotted lines, providing space for writing answers. The lines are evenly spaced and extend across the width of the page.



A large area of the page is reserved for writing, featuring a vertical solid line on the left side and horizontal dotted lines extending across the page.



Oxford Cambridge and RSA

Copyright Information

OCR is committed to seeking permission to reproduce all third-party content that it uses in its assessment materials. OCR has attempted to identify and contact all copyright holders whose work is used in this paper. To avoid the issue of disclosure of answer-related information to candidates, all copyright acknowledgements are reproduced in the OCR Copyright Acknowledgements Booklet. This is produced for each series of examinations and is freely available to download from our public website (www.ocr.org.uk) after the live examination series.

If OCR has unwittingly failed to correctly acknowledge or clear any third-party content in this assessment material, OCR will be happy to correct its mistake at the earliest possible opportunity.

For queries or further information please contact The OCR Copyright Team, The Triangle Building, Shaftesbury Road, Cambridge CB2 8EA.

OCR is part of Cambridge University Press & Assessment, which is itself a department of the University of Cambridge.